

2D Collisions Challenge

Challenge 1

A smooth sphere, A , has mass $3m$ and velocity $7\mathbf{i} - 8\mathbf{j}$. It collides with a second smooth sphere, B , which has mass m and velocity $2\mathbf{i} + 5\mathbf{j}$. The two spheres have the same radius. After the collision, the velocity of B is $5\mathbf{i} - 4\mathbf{j}$.

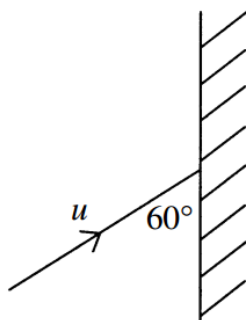
- (a) Find the velocity of A after the collision. (4 marks)
- (b) Find the change in momentum of B . (2 marks)
- (c) Find, as a vector, the direction of the line of centres of the spheres during the collision. Give a reason for your answer. (2 marks)



Challenge 2

A sphere of mass m , moving on a smooth horizontal surface, hits a smooth vertical wall. Just before it hits the wall, the sphere is moving at an angle of 60° to the wall with velocity u .

The diagram shows the view from above.



The coefficient of restitution between the wall and the sphere is $\frac{3}{4}$.

- Modelling the sphere as a particle, find the angle through which the direction of motion of the sphere is changed. (6 marks)
- The impulse exerted by the wall on the sphere acts on the sphere for 0.05 seconds. Given that $m = 0.3 \text{ kg}$, and $u = 5 \text{ m s}^{-1}$, find the average impulsive force acting on the sphere. (7 marks)

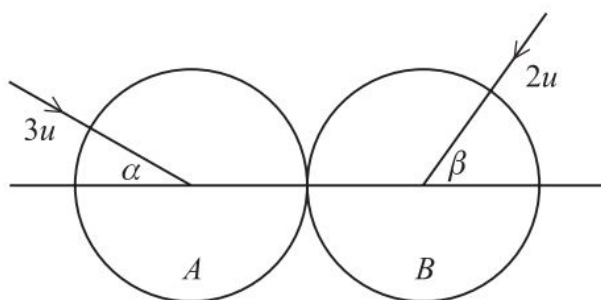


Challenge 3

Two smooth spheres, A and B , of equal radius and masses m and M respectively, are moving on a horizontal plane. Sphere A has speed $3u$, and sphere B has speed $2u$ and is approaching sphere A . The spheres collide and the velocities of the spheres before impact make acute angles α and β with the line of centres, as shown in the diagram.

$$\tan \alpha = \frac{3}{4} \text{ and } \tan \beta = \frac{12}{5}$$

The coefficient of restitution between the spheres is e .



After the collision, the velocity of B is in the direction of the velocity of A before the impact.

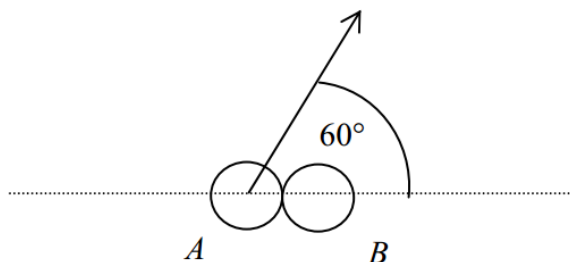
Show that

$$e = \frac{2m + 105M}{103m} \quad (9 \text{ marks})$$



Final Challenge

Two smooth spheres, A and B , have mass m and $2m$ respectively. Sphere A is moving with a constant velocity of 5 m s^{-1} when it collides with sphere B , which was at rest. The velocity of A was at an angle of 60° to the line of centres of the sphere when the collision took place. The coefficient of restitution between the two sphere is $\frac{1}{2}$.



- (a) Show that the speed of B after the collision is $\frac{5}{4} \text{ m s}^{-1}$. (7 marks)
- (b) Find the speed of A after the collision. (4 marks)

